



**SNS academy**

**an International CBSE Finger Print School  
Coimbatore**



**Name :**

**Date :**

**Grade :**

**Worksheet**

**Submission Date :**

**Subject : History**

**Parent's sign :**

**Studying the past, Early Human I &II**

1 .Look at the person in the given picture and identify the profession.

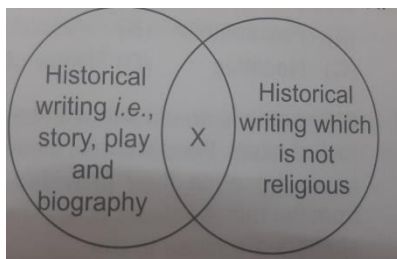


a.Scientist b. Archaeologist c. Merchant d. Traveller

2. Buildings of historical importance are called\_\_\_\_\_

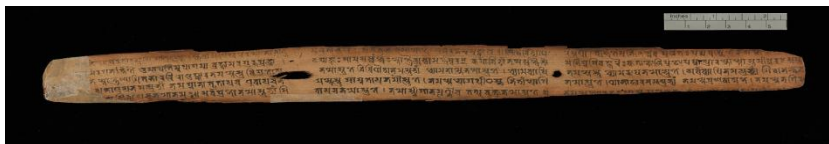
a. Manuscripts b. literary source c. Monuments d. Artifacts

3. Refer to the given diagram and select the option that correctly identifies X.



a.Scientific literature b. Artifacts c. Secular Literature d. Continuous story

4. The text shown in the given picture is \_\_\_\_\_



a.A palm leaf manuscript b. Artifact


c. An old stone inscription d.A birch bark manuscripts

5. Complete the given analogy

Magadha: the first kingdom::\_\_\_\_\_:development of agriculture

a.Ganga valley b. Indus c. Narmada valley d. Garo hills

6. The painting below is a cave painting found in \_\_\_\_\_.



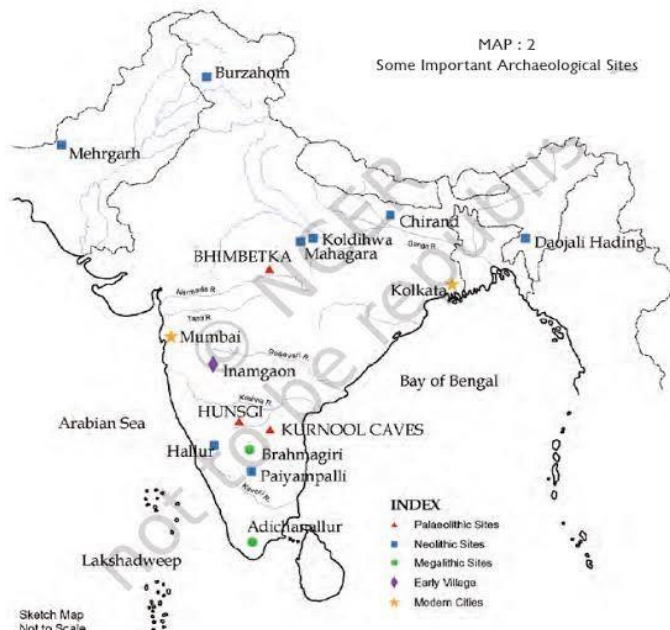
a.Iran b.German c. Bhimbetka d.Pakistan

7. **SUGIHN** unscramble the given letters to obtain the name of an early site, then correctly identifies the site.

a.Neolithic b. Palaeolithic c. Megalithic d. Early village

8. Look at the map. write the stone age period each site belongs to . write P for Paleolithic, M for Megalithic and N for Neolithic sites with their state's name.

	Sites Name	Stone age	State
a.	Burzahom	_____	_____
b.	Bhimbetka	_____	_____
c.	Chirand	_____	_____
d.	Brahmagiri	_____	_____



9.How was the invention of wheel an important step towards progress for early humans?